

# Pass Guaranteed Quiz The Open Group - OGA-031 - Useful ArchiMate 3 Part 1 Exam Reliable Exam Tutorial



P.S. Free & New OGA-031 dumps are available on Google Drive shared by ITExamSimulator: <https://drive.google.com/open?id=1ZHWEeyOa0IbnveRtlzkqNz33vqI95u9N>

ITExamSimulator have the latest The Open Group certification OGA-031 exam training materials. The industrious ITExamSimulator's IT experts through their own expertise and experience continuously produce the latest The Open Group OGA-031 training materials to facilitate IT professionals to pass the The Open Group Certification OGA-031 Exam. The certification of The Open Group OGA-031 more and more valuable in the IT area and a lot people use the products of ITExamSimulator to pass The Open Group certification OGA-031 exam. Through so many feedbacks of these products, our ITExamSimulator products prove to be trusted.

ITExamSimulator provides you with The Open Group OGA-031 exam questions in 3 different formats to open up your study options and suit your preparation tempo. The The Open Group OGA-031 PDF is the most convenient format to go through all exam questions easily. It is a compilation of actual The Open Group OGA-031 exam questions and answers.

>> **OGA-031 Reliable Exam Tutorial** <<

## Exam Questions for The Open Group OGA-031 in PDF Format

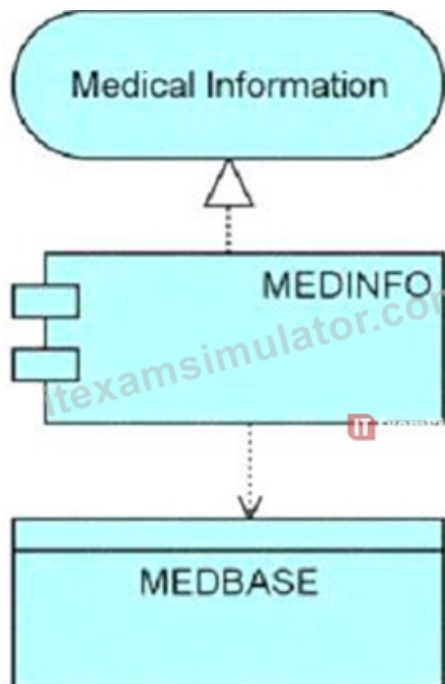
Keeping in view different preparation styles of The Open Group OGA-031 test applicant ITExamSimulator has designed three easy-to-use formats for its product. Each format has a pool of ArchiMate 3 Part 1 Exam (OGA-031) actual questions which have been compiled under the guidance of thousands of professionals worldwide. Questions in this product will appear in the The Open Group OGA-031 final test.

The ArchiMate 3 Part 1 Exam is divided into two parts. Part 1 is a multiple-choice exam that consists of 40 questions, which must be completed within 60 minutes. OGA-031 exam covers the basics of the ArchiMate modeling language, including the concepts, notation, and syntax for creating enterprise architecture models. OGA-031 Exam also tests the candidate's knowledge of the different layers of the ArchiMate framework, including the business, application, and technology layers. A passing score of 60% is required to obtain ArchiMate 3 Part 1 certification.

## The Open Group ArchiMate 3 Part 1 Exam Sample Questions (Q57-Q62):

### NEW QUESTION # 57

Consider the following diagram showing a system used for settling injury claims:



Which answer correctly describes this diagram?

- A. The MED8ASE application uses MEDINFO middleware to present the Medical Information user interface.
- B. The Medical Information application uses a back-end module called MEDINFO to access a data object called MEDBASE.
- C. The MEDINFO application serves the Medical Information department, and accesses a data object called MEDBASE\_
- **D. The MEDINFO application realizes the Medical Information service, and accesses a data object called MEDBASE-**

**Answer: D**

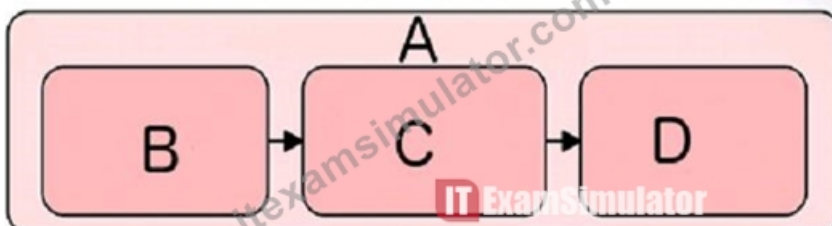
Explanation:

Based on the ArchiMate 3 documents or objectives, an application component represents a modular, deployable, and replaceable part of a software system that encapsulates its behavior and data. An application service represents an explicitly defined exposed application behavior. A data object represents data structured for automated processing. A realization relationship indicates that an entity plays a critical role in the creation, achievement, sustenance, or operation of a more abstract entity. An access relationship models the ability of behavior and active structure elements to observe or act upon passive structure elements. The diagram uses a realization relationship from the MEDINFO application component to the Medical Information service to indicate that the application component realizes the service. The diagram also uses an access relationship from the MEDINFO application component to the MEDBASE data object to indicate that the application component accesses the data object.

References: ArchiMate 3.2 Specification, Chapter 10 Application Layer, Section 10.1 Active Structure Elements 1; ArchiMate 3.2 Specification, Chapter 10 Application Layer, Section 10.3 Behavior Elements 1; ArchiMate 3.2 Specification, Chapter 5 Relationships, Section 5.1 Structural Relationships 1; ArchiMate 3.2 Specification, Chapter 5 Relationships, Section 5.3 Access Relationships 1; ArchiMate Example: Application Components - Visual Paradigm 2.

#### NEW QUESTION # 58

Which answer correctly describes the four elements (A, B, C, and D) shown in this diagram?



- **A. Work packages**
- B. Business processes
- C. Project components

- D. A plateau and deliverables

**Answer: A**

Explanation:

The diagram shows a work package, which is a grouping of behavior and/or structure elements that can be assigned to one or more performers. A work package can be used to model a project or a program, and it can contain deliverables, which are outcomes of the work package. The four elements (A, B, C, and D) are all deliverables that are part of the work package.

#### NEW QUESTION # 59

Complete the sentence. In the physical elements metamodel, a facility is a specialization of a \_\_\_\_\_

- A. Technology interaction
- B. Technology service
- C. Node
- D. path

**Answer: C**

Explanation:

According to the physical elements metamodel, a facility is a specialization of a node, which is an active structure element that represents a computational or physical resource that hosts, manipulates, or interacts with other computational or physical resources. A facility can be used to model physical buildings or locations.

#### NEW QUESTION # 60

In the Business Layer metamodel, what type of element is assigned to a Business Service?

- A. Business Interface
- B. Business Actor
- C. Business Process
- D. Business Event

**Answer: A**

Explanation:

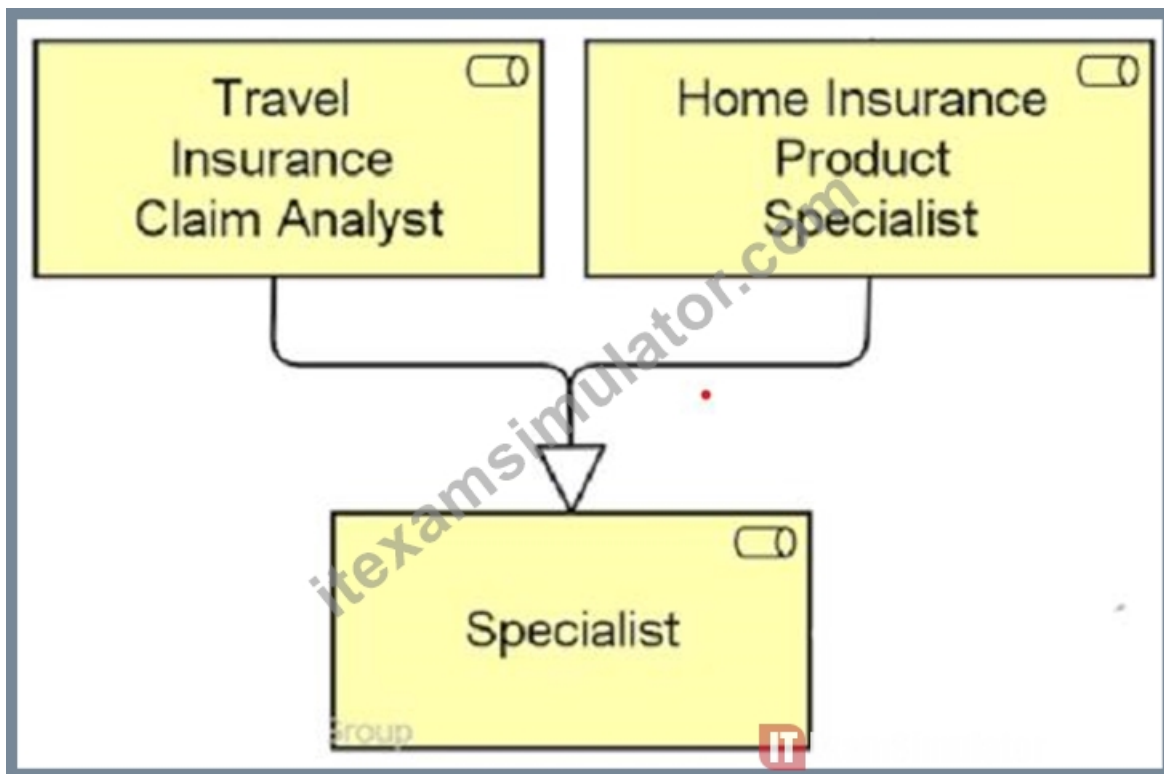
Comprehensive and Detailed in Depth Explanation: A Business Interface is an external active structure element that provides an external point of access to one or more Business Services. In the Business Layer metamodel, a Business Service is assigned to a Business Interface because interfaces define how services are exposed to external parties or other components within an enterprise. This is confirmed in the ArchiMate Specification 3.2, where a Business Interface is described as representing a point of interaction that enables access to Business Services.

References:

- \* Archi User Guide
- \* ArchiMate 3.2 Specification

#### NEW QUESTION # 61

Consider the following diagram:



Which of the following correctly describes this diagram?

- A. The two business roles Travel Insurance Claim Analyst and Home Insurance Product Specialist together realize the business role Specialist.
- B. The business role Specialist approves all claims handled by the two business roles Travel Insurance Claim Analyst and Home Insurance Product Specialist
- C. The business role Specialist is an aggregation of the two business roles Travel Insurance Claim Analyst and Home Insurance Product Specialist.
- **D. The two business roles Travel Insurance Claim Analyst and Home Insurance Product Specialist are specializations of the business role Specialist**

**Answer: D**

Explanation:

Based on the ArchiMate 3 documents or objectives, the diagram uses a specialization relationship to indicate that the two business roles Travel Insurance Claim Analyst and Home Insurance Product Specialist are more specific versions of the business role Specialist. A specialization relationship is a type of structural relationship that indicates that an object is a specialization of another object. The notation for a specialization relationship is a solid line with an empty triangle at the end that points to the more general element.

## NEW QUESTION # 62

.....

Studying for attending ArchiMate 3 Part 1 Exam exam pays attention to the method. The good method often can bring the result with half the effort, therefore we in the examination time, and also should know some test-taking skill. The OGA-031 quiz guide on the basis of summarizing the past years, found that many of the questions, the answers have certain rules can be found, either subjective or objective questions, we can find in the corresponding module of similar things in common. To this end, the ArchiMate 3 Part 1 Exam exam dumps have summarized some types of questions in the qualification examination, so that users will not be confused when they take part in the exam, to have no emphatic answers. It can be said that the template of these questions can be completely applied. The user only needs to write out the routine and step points of the OGA-031 test material, so that we can get good results in the exams.

**Valid OGA-031 Test Voucher:** <https://www.itexamsimulator.com/OGA-031-brain-dumps.html>

- OGA-031 100% Correct Answers ☐ OGA-031 Braindump Pdf ☐ Reliable OGA-031 Test Preparation ☐ Search for “OGA-031 ” and download exam materials for free through 「 [www.validtorrent.com](http://www.validtorrent.com) 」 ☐ OGA-031 100% Correct

## Answers

- Pass OGA-031 Exam with Flying Colors Using The Open Group's Exam Questions and Achieve Success □ Easily obtain free download of ➤ OGA-031 □ by searching on { [www.pdfvce.com](http://www.pdfvce.com) } □ Reliable OGA-031 Test Preparation
- Quiz OGA-031 - Authoritative ArchiMate 3 Part 1 Exam Reliable Exam Tutorial ↗ Search for ➤ OGA-031 □ and download it for free immediately on ► [www.pass4test.com](http://www.pass4test.com) ◀ □ Valid OGA-031 Test Prep
- Pass-Sure OGA-031 Reliable Exam Tutorial - Leading Offer in Qualification Exams - Marvelous The Open Group ArchiMate 3 Part 1 Exam □ Open 《 [www.pdfvce.com](http://www.pdfvce.com) 》 enter ► OGA-031 ◀ and obtain a free download □ Latest OGA-031 Test Objectives
- Hot OGA-031 Reliable Exam Tutorial | Efficient The Open Group OGA-031: ArchiMate 3 Part 1 Exam 100% Pass □ Search for 「 OGA-031 」 and download it for free on □ [www.testkingpass.com](http://www.testkingpass.com) □ website □ OGA-031 Download
- OGA-031 Valid Test Sample □ Valid Exam OGA-031 Book □ OGA-031 Exam Testking □ Search for □ OGA-031 □ and download it for free on [ [www.pdfvce.com](http://www.pdfvce.com) ] website □ Valid Exam OGA-031 Book
- OGA-031 Reliable Test Test □ Dumps OGA-031 Guide □ Exam OGA-031 Preparation □ Easily obtain free download of ⇒ OGA-031 ⇐ by searching on “ [www.prepawayexam.com](http://www.prepawayexam.com) ” □ Dumps OGA-031 Guide
- OGA-031 Reliable Test Test □ Reliable OGA-031 Braindumps □ OGA-031 Exam Pattern □ Download ➤ OGA-031 □ for free by simply entering 【 [www.pdfvce.com](http://www.pdfvce.com) 】 website □ Accurate OGA-031 Answers
- OGA-031 Valid Test Sample □ OGA-031 Exam Testking □ Reliable OGA-031 Test Preparation □ Open ✓ [www.exam4labs.com](http://www.exam4labs.com) □ ✓ □ enter ➤ OGA-031 □ and obtain a free download □ Latest OGA-031 Test Objectives
- OGA-031 Exam Pattern □ Exam OGA-031 Preparation □ VCE OGA-031 Dumps □ Search on ➡ [www.pdfvce.com](http://www.pdfvce.com) □ for ► OGA-031 ◀ to obtain exam materials for free download □ Dump OGA-031 Check
- Quiz OGA-031 - Authoritative ArchiMate 3 Part 1 Exam Reliable Exam Tutorial □ Search for “ OGA-031 ” and download it for free on “ [www.troytecdumps.com](http://www.troytecdumps.com) ” website □ Latest OGA-031 Test Objectives
- [www.stes.tyc.edu.tw](http://www.stes.tyc.edu.tw), [www.stes.tyc.edu.tw](http://www.stes.tyc.edu.tw), [www.stes.tyc.edu.tw](http://www.stes.tyc.edu.tw), [www.stes.tyc.edu.tw](http://www.stes.tyc.edu.tw), [www.stes.tyc.edu.tw](http://www.stes.tyc.edu.tw), [www.stes.tyc.edu.tw](http://www.stes.tyc.edu.tw), [www.stes.tyc.edu.tw](http://www.stes.tyc.edu.tw), [www.stes.tyc.edu.tw](http://www.stes.tyc.edu.tw), [www.stes.tyc.edu.tw](http://www.stes.tyc.edu.tw), Disposable vapes

DOWNLOAD the newest ITExamSimulator OGA-031 PDF dumps from Cloud Storage for free: <https://drive.google.com/open?id=1ZHWEeyOa0IbnveRtlzkqNz33vqf95u9N>