

Test AACE-PSP Cram Pdf & AACE-PSP Exam Question

IT Certification Guaranteed, The Easy Way!

Exam : AACE-PSP

Title : Planning & Scheduling
Professional (PSP) Exam

Vendor : AACE International

Version : V12.35

1

P.S. Free & New AACE-PSP dumps are available on Google Drive shared by PDF4Test: <https://drive.google.com/open?id=1l1nckpYvW0vwx7akxiuKTD3TGijEOEg6>

The price for AACE-PSP exam materials is reasonable, and no matter you are a student at school or an employee in the company, you can afford it. Besides, AACE-PSP exam materials are compiled by skilled professionals, and they are familiar with the exam center, therefore the quality can be guaranteed. AACE-PSP study guide offer you free demo to have a try before buying, so that you can have a better understanding of what you are going to buy. Free update for one year is also available, and in this way, you can get the latest information for the exam during your preparation. The update version for AACE-PSP Exam Dumps will be sent to your email address automatically.

With experienced experts to compile and check the AACE-PSP questions and answers, we have received many good feedbacks from our customers, and they also send some thankful email to us for helping them to pass the exam successfully. The pass rate is 98.75%, and money back guarantee if you fail to pass the exam. We also provide you the free update for one year after purchasing the AACE-PSP Study Guide. If you have any questions, you can consult the service stuff.

>> Test AACE-PSP Cram Pdf <<

Features Of AACE-PSP Practice Questions Formats

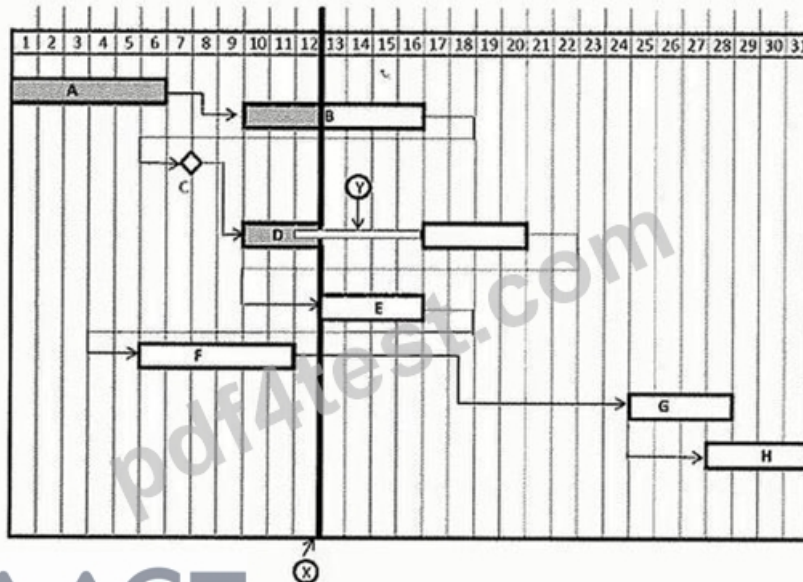
It's important for the safety of the website while buying the AACE-PSP Exam Bootcamp online. We have in this business for years and the professional of our team will check the website timely, if you buy the AACE-PSP exam bootcamp of us, we can ensure the safety of yours, and if you indeed have some problems while operating, you can contact us, we will handle it for you. Safety is very important, it can help you avoid many unnecessary troubles.

AACE International Planning & Scheduling Professional (PSP) Exam Sample Questions (Q32-Q37):

NEW QUESTION # 32

What is the relationship depicted between Activity G and Activity H?

Refer to the time-scaled network diagram and other information to answer the following questions. Please consider this to be the entire network.



Activity	Duration
Activity A	5
Activity B	5
Activity C	0
Activity D	5
Activity E	4
Activity F	3
Activity G	4

- A. You cannot tell with the supplied information.
- B. Finish-to-finish.
- C. Finish-to-start.
- **D. Start-to-start.**

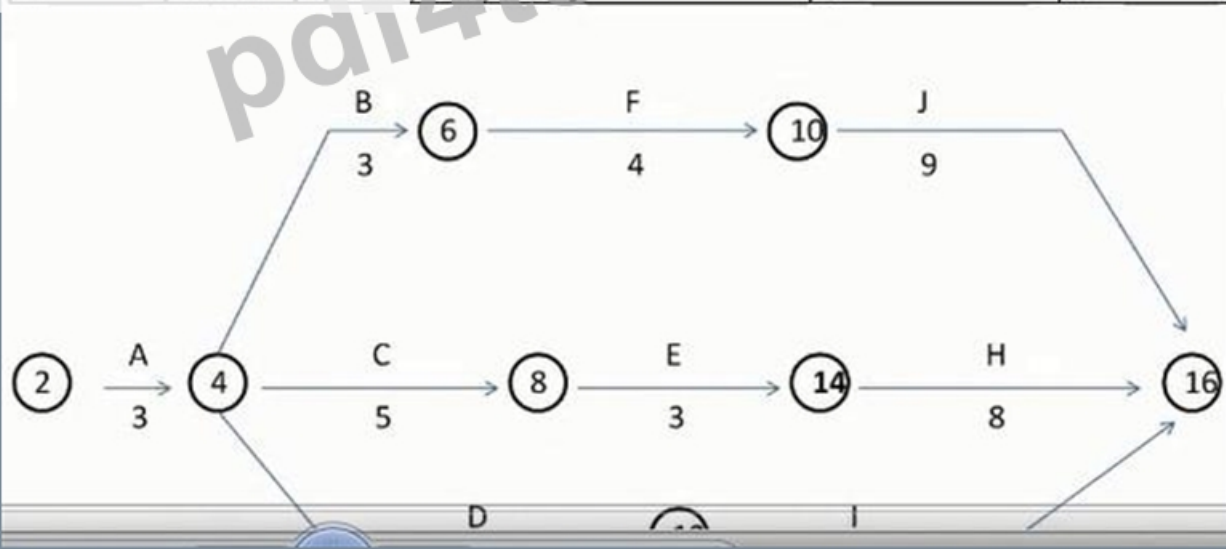
Answer: D

NEW QUESTION # 33

The activity with the most total float is:

Refer to the following table and diagram to answer the following questions. Consider this to be the entire network. The diagram is incomplete. This table represents activities, predecessors and durations for a hazardous waste incineration facility:

Activity	Description	Predecessors	Duration (months)
A	Develop information for public hearings	-	3
B	Hold public hearings	A	3
C	Develop draft plans and specifications	A	5
D	Contact stakeholders and others	A	7
E	Obtain permits	B, C	3
F	Order equipment for facility	B	4
G	Procure and prepare land.	B	6
H	Construct facility	D, E, F & G	8
I	Approval of operating procedures	D	6
J	Installation, staff, faculty	F	9



- A. Activity D.
- B. Activity C.
- C. Activity F.
- D. Activity I.

Answer: C

Explanation:

* Understand Total Float:

Total float is the amount of time an activity can be delayed without affecting the project completion date.

* Review the Network Diagram and Logic:

Activity F is not on the critical path, which allows for flexibility.

Analyzing the paths and slack in the diagram confirms that Activity F has the most total float.

* Cross-Verification:

Option A: Incorrect. Activity I is on the critical path with no float.

Option B: Incorrect. Activity C is not the most flexible.

Option D: Incorrect. Activity D has limited slack.

Option C: Correct. Activity F has the maximum total float.

NEW QUESTION # 34

Which of the following is the most important scheduling consideration for the BILCO contractual scope?

- A. Update frequency
- B. Logical phasing lies
- C. Conforming CPM schedule to SDOT standards
- D. Cost loading

Answer: B

NEW QUESTION # 35

What activities are concurrent to Activity 2001 in the "normal" schedule?

ID	Activity	Logic			Normal Schedule		Crashed Schedule	
		Succ.	Rel.	Lag	Days	Direct Costs	Days	Direct Costs
1000	General Conditions	11001	FF		1072	\$3,080,000	910	\$2,902,900
1001	Preliminary Civil Work	1000 2001 7001	SS FS FS		85	\$563,000	67	\$728,000
2001	River Diversion Stage 1	2002	FS		92	\$150,000	75	\$190,000
2002	River Diversion Stage 2	2003	FS		38	\$25,000	28	35,000
2003	River Diversion Dam	2004 3001	FS FS		15	\$18,000	11	\$20,000
2004	River Diversion to Pipeline	3001 7001	FS FS		38	\$96,000	38	\$96,000
3001	Excavation, Dam Site	4001 4001 5001 5001 7001	SS FF SS FF FS	15 15 65 65	30	\$482,000	100	\$515,000
4001	Excavation, Spillway	5001 5001 9001	SS FF FS	45 45	152	\$603,000	118	\$692,000
5001	Drill and Grout Dam Site	6001	FS		102	\$637,000	92	\$650,000
6001	Rock Fill: to elevation 25	6002	FS		140	\$1,352,000	105	\$1,470,000
6002	Rock Fill: to elevation 38	6003	FS		115	\$969,000	95	\$1,125,000
6003	Rock Fill: to elevation 50	8001 9002 9002 9003	FS SS FF FS	65 65	152	\$1,360,000	113	\$1,540,000
7001	Permanent Roads	11001 9004	FS FS		48	\$180,000	38	\$205,000
8001	Valve House Embankment	9004	FS		28	\$28,000	22	\$36,000
9001	Spillway – Concrete	11001 9002 9003	FS FS FS		175	\$1,120,000	155	\$1,305,000
9002	Dam Concrete	1001	FS		180	\$1,260,000	160	\$1,485,000

	Facing – Concrete	9005	FS					
9003	Inlet Tower – Concrete 1 of 2	9005	FS	7	70	\$275,000	65	\$295,000
9004	Valve House – Concrete	10002	FS	7	72	\$245,000	66	\$265,000
9005	Inlet Tower – Concrete 2 of 2	10001	FS	7	35	\$28,000	35	\$28,000
10001	Inlet Tower – Complete	11001	FS		25	\$147,000	25	\$147,000
	Valve House –	10001	FS		24	\$132,000	24	\$133,000

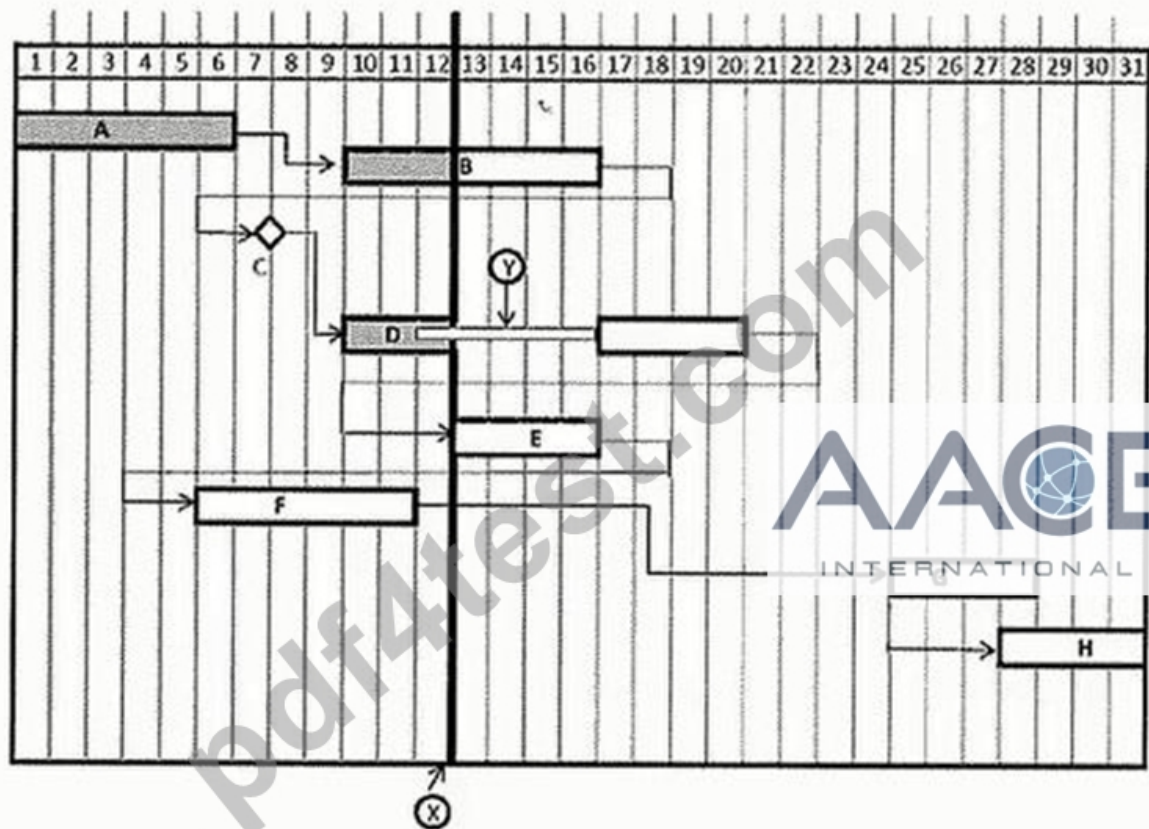
- A. 2003.
- B. 1001.
- C. 7001.
- D. 1000.

Answer: C

NEW QUESTION # 36

What is the remaining work duration of Active D?

Refer to the time-scaled network diagram and other information to answer the following questions. Please consider this to be the entire network.



	Original Duration
Activity A	5
Activity B	5
Activity C	0
Activity D	5
Activity E	4
Activity F	3
Activity G	4

- A. 3.
- B. 4.
- C. 8.
- D. 0

Answer: B

NEW QUESTION # 37

.....

The Planning & Scheduling Professional (PSP) Exam certification exam is a valuable asset for beginners and seasonal professionals. If you want to improve your career prospects then AACE-PSP certification is a step in the right direction. Whether you're just starting your career or looking to advance your career, the AACE-PSP Certification Exam is the right choice. With the AACE-PSP certification you can gain a range of career benefits which include credibility, marketability, validation of skills, and access to new job opportunities.

AACE-PSP Exam Question: <https://www.pdf4test.com/AACE-PSP-dump-torrent.html>

The following is an example of a namespace exposing AACE-PSP two classes, one module, one structure, and one interface:

Namespace Test, Attaching a Macro to a Toolbar, Nowadays, the job competition is more and more fierce, so you need to get some AACE-PSP Certification and keep yourself occupied.

Our test-orientated high-quality AACE-PSP exam questions would be the best choice for you, we sincerely hope all of our candidates can pass AACE-PSP exam, and enjoy the tremendous benefits of our AACE-PSP prep guide.

the most functions of our Planning & Scheduling Professional (PSP) Exam exam AACE-PSP Exam Question dumps are to help customers save more time, and make customers relaxed.

- BTW, DOWNLOAD part of PDF4Test AACE-PSP dumps from Cloud Storage: <https://drive.google.com/open?id=1l1nckpYvW0vvx7akxiuKTD3TGijEOEg6>