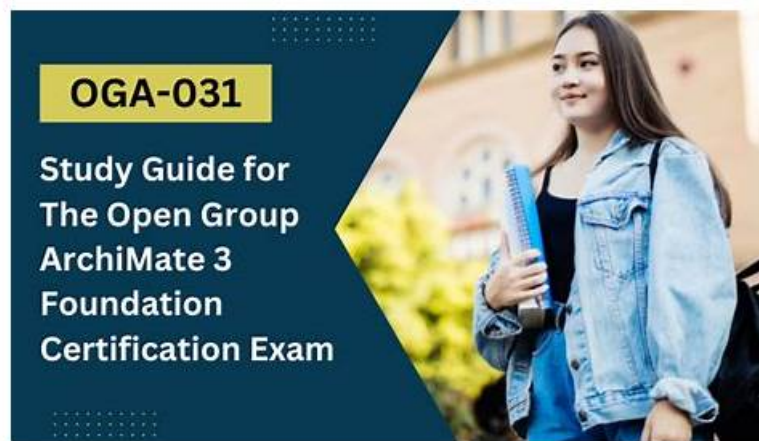


OGA-031 Testdump - Pass OGA-031 Test Guide



BONUS!!! Download part of Real4Prep OGA-031 dumps for free: https://drive.google.com/open?id=12vi9_olkO4TuK1erzd3n3WngJF19QHS

ArchiMate 3 Part 1 Exam exam is one of the top-rated The Open Group OGA-031 Exams. This ArchiMate 3 Part 1 Exam exam offers an industrial-recognized way to validate a candidate's skills and knowledge. Everyone can participate in ArchiMate 3 Part 1 Exam exam requirements after completing the ArchiMate 3 Part 1 Exam exam. With the ArchiMate 3 Part 1 Exam exam you can learn in-demand skills and upgrade your knowledge. You can enhance your salary package and you can get a promotion in your company instantly.

The Open Group OGA-031 (ArchiMate 3 Part 1) certification exam is designed to test the knowledge and skills of individuals in the area of enterprise architecture using the ArchiMate 3 modeling language. The ArchiMate 3 modeling language is widely used by enterprise architecture professionals to describe, analyze and visualize complex systems and processes in a standardized and clear manner. ArchiMate 3 Part 1 Exam certification exam is aimed at individuals who want to demonstrate their proficiency in using ArchiMate 3 to design and analyze enterprise architectures.

>> OGA-031 Testdump <<

100% Free OGA-031 – 100% Free Testdump | the Best Pass ArchiMate 3 Part 1 Exam Test Guide

After you pay for our OGA-031 exam material online, you will get the link to download it in only 5 to 10 minutes. You don't need to worry about safety in buying our OGA-031 exam materials. Our products are free from computer virus and we will protect your private information. You won't get any telephone harassment or receiving junk E-mails after purchasing our OGA-031 Study Guide. If we have a new version of your study material, we will send an E-mail to you. Whenever you have questions about our OGA-031 study material, you are welcome to contact us via E-mail.

The OGA-031 (ArchiMate 3 Part 1) Exam is suitable for professionals who are involved in enterprise architecture, business analysis, and IT system development. OGA-031 exam is based on the ArchiMate 3.0 specification, which is the latest version of the language. It covers the basic concepts, elements, and relationships of the language, as well as its application to enterprise architecture. OGA-031 Exam has 40 multiple-choice questions, and the passing score is 60%.

The Open Group ArchiMate 3 Part 1 Exam Sample Questions (Q75-Q80):

NEW QUESTION # 75

What element type is denoted by the symbol below using the standard notation conventions?



- A. Motivation element
- B. Behavior element
- **C. Structure element**
- D. Physical element

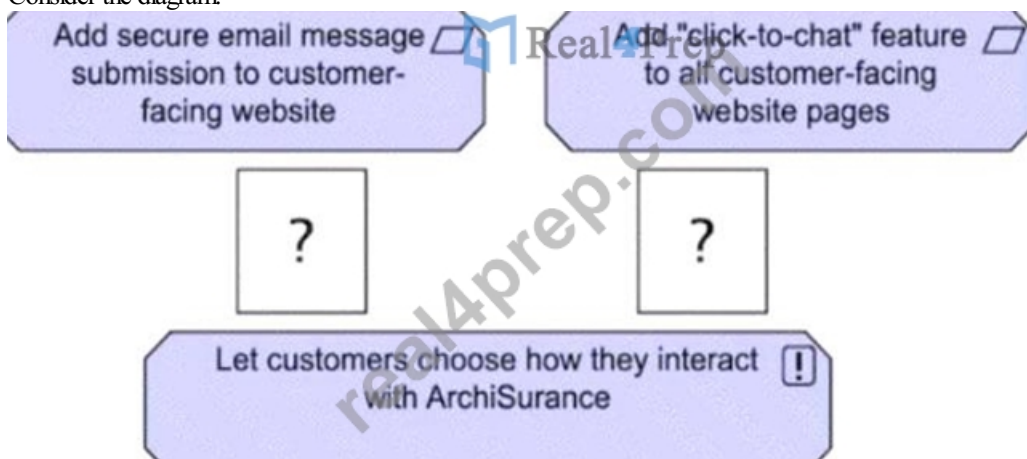
Answer: C

Explanation:

According to the standard notation conventions, a structure element is denoted by a rectangle with rounded corners. A structure element represents an entity that has a state and exhibits some behavior. Examples of structure elements are actors, roles, components, nodes, and objects.

NEW QUESTION # 76

Consider the diagram:



(A diagram showing "Add secure email message submission to customer-facing website" and "Add 'click-to-chat' feature to all customer-facing website pages" at the top, both connected to "Let customers choose how they interact with ArchiSurance" at the bottom with a missing relationship type.) Which of the following is the correct relationship between the bottom element and the top elements?

- A. Aggregation
- B. Specialization
- **C. Realization**
- D. Access

Answer: C

Explanation:

Comprehensive and Detailed In-Depth Explanation:

This diagram represents a goal-driven model where the bottom element ("Let customers choose how they interact with ArchiSurance") describes a high-level objective or outcome, while the top elements represent specific implementations that fulfill this objective.

In ArchiMate 3.2, the Realization relationship is used when:

- * A higher-level concept (e.g., a goal or requirement) is realized by more specific lower-level elements.
- * Concrete solutions (e.g., features or processes) implement or fulfill an abstract goal.

Understanding the Diagram:

- * The goal is to let customers choose how they interact with ArchiSurance.
- * The two elements at the top ("Add secure email message submission" and "Add click-to-chat feature") are specific solutions that make this goal achievable.
- * This fits exactly with the Realization relationship, where a goal or requirement is realized by specific actions.

Analysis of Answer Choices:

#A. Aggregation##Incorrect

- * Aggregation represents a "whole-part" relationship, where elements can exist independently of the whole.
- * The top elements are not separate, independent components but rather implementations of the bottom element.

#B. Access##Incorrect

- * Access relationships are used for information flow, such as reading, writing, or modifying data.
- * This model is about realizing a business objective, not accessing data.

#C. Realization##Correct Answer

- * The bottom element is a higher-level goal, and the top elements implement or realize it.
- * ArchiMate 3.2 Specification, Section 6.4.9, states that Realization relationships link abstract concepts (like goals) to concrete implementations (like processes, services, or functions).

#D. Specialization##Incorrect

- * Specialization relationships are used when one concept is a subtype of another.
- * The top elements are not specialized versions of the bottom element; rather, they implement it.

C: Realization

References:

- * ArchiMate 3.2 Specification: Section 6.4.9 (Realization Relationship).
- * Archi User Guide: Understanding goal realization and requirement fulfillment.

NEW QUESTION # 77

Consider the diagram:



(A diagram showing three goals: Increase Premium by 12%, Reduce Usage of Consultants by 25%, and Increase Internal Labor Expense by no more than 4%, all connected to Reduce Expense Ratio from 15% to 10% using aggregation relationships.) What is the best description of the diagram?

- A. The goal "Reduce Expense Ratio from 15% to 10%" is similar to the three other goals.
- **B. The goal "Reduce Expense Ratio from 15% to 10%" combines three other goals.**
- C. The goal "Reduce Expense Ratio from 15% to 10%" must be achieved before any of the other three goals is achieved.
- D. The goal "Reduce Expense Ratio from 15% to 10%" will be achieved if at least one of the other three goals is achieved.

Answer: B

Explanation:

Comprehensive and Detailed In-Depth Explanation:

This diagram represents a goal decomposition model in ArchiMate, specifically illustrating how multiple lower-level goals contribute to a higher-level goal.

* The top three goals ("Increase Premium," "Reduce Consultant Usage," and "Increase Internal Labor Expense") are connected to "Reduce Expense Ratio" using an aggregation relationship.

* Aggregation in ArchiMate indicates that multiple elements together contribute to forming a larger whole.

* This means "Reduce Expense Ratio from 15% to 10%" is composed of these three contributing goals.

Analysis of Answer Choices:

#A. The goal "Reduce Expense Ratio from 15% to 10%" combines three other goals.##Correct Answer

* The aggregation relationship used in the diagram indicates that the three top-level goals together support or combine to form the "Reduce Expense Ratio" goal.

* ArchiMate 3.2 Specification, Section 6.4.1, states that Aggregation represents a "whole-part" relationship, meaning the main goal (Reduce Expense Ratio) is achieved by achieving the contributing goals.

#B. The goal "Reduce Expense Ratio from 15% to 10%" will be achieved if at least one of the other three goals is achieved.##Incorrect

* This would require an Influence or Contribution relationship rather than Aggregation.

* Aggregation means all three goals contribute to the overall goal, not just one of them.

#C. The goal "Reduce Expense Ratio from 15% to 10%" must be achieved before any of the other three goals is achieved.##Incorrect

* This would imply a triggering or dependency relationship, which is not present in the diagram.

* The diagram does not indicate a sequence of achievements.

#D. The goal "Reduce Expense Ratio from 15% to 10%" is similar to the three other goals.##Incorrect

* The relationship shown is not equivalence or similarity, but aggregation, meaning the three smaller goals form part of the main goal.

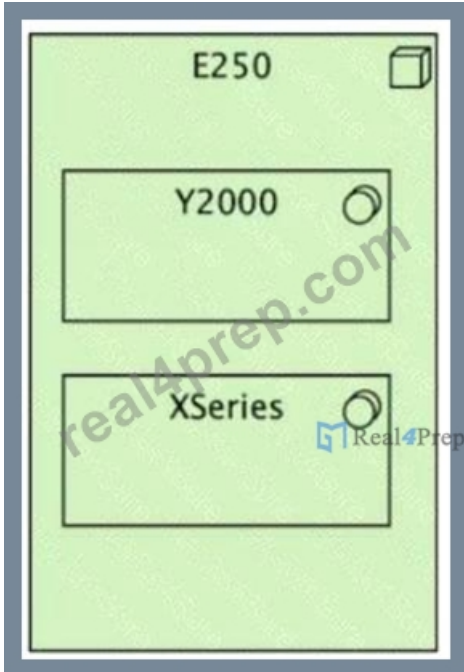
#A. The goal "Reduce Expense Ratio from 15% to 10%" combines three other goals.

References:

- * ArchiMate 3.2 Specification: Sections 6.4.1 (Aggregation) and 6.2.2 (Goal Decomposition).
- * Archi User Guide: Understanding goal decomposition and strategic planning.

NEW QUESTION # 78

Consider the diagram showing a standard server configuration at ArchiSurance:



(A diagram depicting E250 as a node, containing Y2000 and XSeries as internal components.) Which of the following correctly describes the diagram?

- A. The E250 device is fitted with the Y2000 software application and the XSeries communication middleware.
- **B. The E250 node is running Y2000 middleware and the XSeries operating system.**
- C. The E250 is an assembly of Y2000 processing units and XSeries high-speed memory.
- D. The E250 node is running internally-developed Y2000 software for enterprise risk analysis and is fitted with an XSeries custom disk array.

Answer: B

Explanation:

Comprehensive and Detailed In-Depth Explanation:

This ArchiMate Technology Layer diagram represents a server configuration, where:

- * E250 is modeled as a Technology Node (a physical or virtual server).
- * Y2000 and XSeries are contained within E250, indicating that they are software components running on this node.
- * The relationship suggests that Y2000 is middleware and XSeries is an operating system.

In ArchiMate 3.2, a Technology Node represents a computing platform that hosts software elements like applications, middleware, and operating systems.

Analysis of Answer Choices:

#A. The E250 is an assembly of Y2000 processing units and XSeries high-speed memory. ##Incorrect

* E250 is a Technology Node (server), not just hardware components.

* Y2000 and XSeries are software components, not processing units or memory modules.

#B. The E250 node is running internally-developed Y2000 software for enterprise risk analysis and is fitted with an XSeries custom disk array. ##Incorrect

* There is no indication that XSeries is a disk array; rather, it appears to be software.

* The diagram shows Y2000 and XSeries as software components inside E250, not as hardware attachments.

#C. The E250 device is fitted with the Y2000 software application and the XSeries communication middleware. ##Incorrect

* Middleware typically supports application integration, while operating systems manage hardware resources.

* The diagram suggests that XSeries functions as an OS, not middleware.

#D. The E250 node is running Y2000 middleware and the XSeries operating system. ##Correct Answer

* This matches typical server configurations where a middleware application runs on top of an operating system.

- * Y2000 (middleware) handles enterprise risk analysis functions, while XSeries (operating system) manages the E250 server.
- * ArchiMate 3.2 Specification, Section 6.6.5, defines Middleware as software that facilitates integration between applications and the underlying OS.
- #D. The E250 node is running Y2000 middleware and the XSeries operating system.
- References:
 - * ArchiMate 3.2 Specification: Sections 6.6.1 (Technology Nodes), 6.6.5 (Middleware), and 6.6.6 (Operating Systems).
 - * Archi User Guide: Modeling technology infrastructure and server configurations.

NEW QUESTION # 79

What physical element is used to model buildings that have an important role in production processes?

- A. Equipment
- B. Distribution node
- C. Manufacturing Plant
- **D. Facility**

Answer: D

Explanation:

According to the ArchiMate 3.2 Specification¹, a facility is a physical element that is used to model buildings that have an important role in production processes. A facility represents a physical structure or environment¹. Therefore, the correct answer is A. Facility.

NEW QUESTION # 80

.....

Pass OGA-031 Test Guide: <https://www.real4prep.com/OGA-031-exam.html>

- New OGA-031 Exam Guide □ Certification OGA-031 Questions □ OGA-031 Test Dumps Free □ Search on [www.itcerttest.com] for ☀ OGA-031 □ ☀ □ to obtain exam materials for free download □ Reliable OGA-031 Braindumps Files
- OGA-031 Exam Engine □ Latest OGA-031 Questions □ Trustworthy OGA-031 Exam Torrent □ Simply search for ▷ OGA-031 ◁ for free download on ☀ www.pdfvce.com □ ☀ □ □ New OGA-031 Exam Guide
- Updated OGA-031 Testdump | OGA-031 100% Free Pass Test Guide □ Search for (OGA-031) and easily obtain a free download on □ www.getvalidtest.com □ □ Exam OGA-031 Vce Format
- Updated OGA-031 Testdump | OGA-031 100% Free Pass Test Guide □ Copy URL □ www.pdfvce.com □ open and search for □ OGA-031 □ to download for free □ OGA-031 Exam Blueprint
- Pass Guaranteed Quiz 2025 The Open Group Useful OGA-031 Testdump □ Search for ⇒ OGA-031 ⇐ and download exam materials for free through [www.passcollection.com] □ OGA-031 Test Dumps Free
- OGA-031 Exam Blueprint □ OGA-031 Related Exams □ OGA-031 Exam Actual Tests □ Search for ➡ OGA-031 □ and easily obtain a free download on 《 www.pdfvce.com 》 □ OGA-031 Exam Actual Tests
- OGA-031 Related Exams □ OGA-031 Exam Actual Tests □ OGA-031 Exam Engine □ Easily obtain “OGA-031 ” for free download through ➡ www.vceengine.com □ □ OGA-031 Valid Exam Objectives
- Certification OGA-031 Questions ☒ Reliable OGA-031 Braindumps Files □ Certification OGA-031 Questions □ Search for □ OGA-031 □ on □ www.pdfvce.com □ immediately to obtain a free download ☒ Certification OGA-031 Questions
- Buy www.free4dump.com OGA-031 Exam Dumps Today and Get Free Updates for 1 year □ Simply search for □ OGA-031 □ for free download on 【 www.free4dump.com 】 □ Trustworthy OGA-031 Exam Torrent
- OGA-031 Test Dumps Free □ Reliable OGA-031 Braindumps Files □ OGA-031 Brain Dump Free □ Open website [www.pdfvce.com] and search for ➡ OGA-031 □ for free download □ Certification OGA-031 Questions
- 2025 The Open Group Unparalleled OGA-031 Testdump Pass Guaranteed Quiz □ Immediately open □ www.prep4pass.com □ and search for 【 OGA-031 】 to obtain a free download □ OGA-031 Exam Engine
- www.stes.tyc.edu.tw, www.stes.tyc.edu.tw, www.stes.tyc.edu.tw, newex92457.blogripley.com, newex92457.blogcudinti.com, www.stes.tyc.edu.tw, myportal.utt.edu.tt, myportal.utt.edu.tt, myportal.utt.edu.tt, myportal.utt.edu.tt, myportal.utt.edu.tt, myportal.utt.edu.tt, myportal.utt.edu.tt, www.stes.tyc.edu.tw, test.york360.ca, www.stes.tyc.edu.tw, Disposable vapes

What's more, part of that Real4Prep OGA-031 dumps now are free: https://drive.google.com/open?id=12vi9_olkO4TuK1erzd3n3WngJF19QHS